

<b>Identify or show any number of thirds, quarters, fifths or tenths of a quantity</b>	<b>Component 3</b>	<b>Entry 3.3</b>
--	--------------------	------------------


Name .....

1 Shade in

a) three tenths



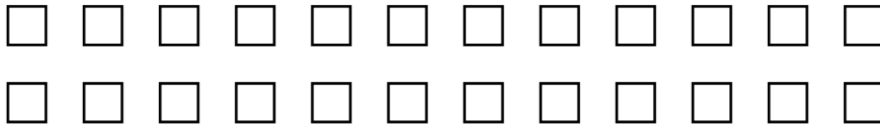
b) two fifths



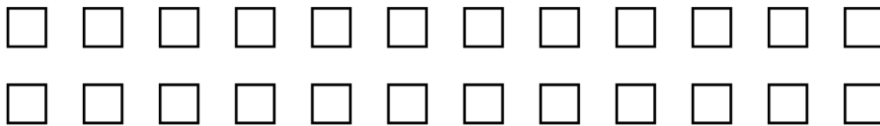
c) two thirds



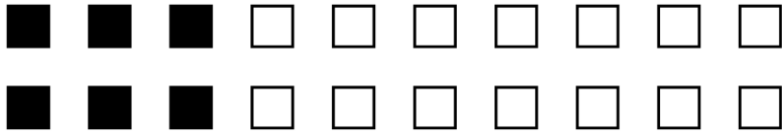
2 Shade in three quarters of the tiles.



3 Shade in two thirds of the tiles.



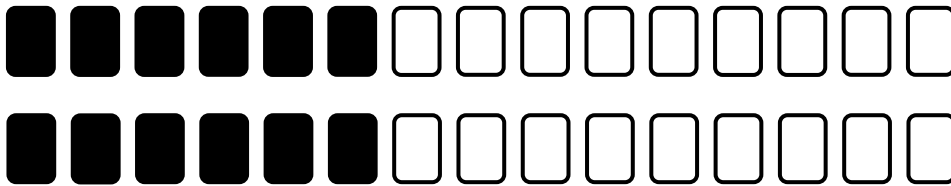
4 Look at the tiles.



Circle the correct words.

**Three tenths / six tenths** of the counters are shaded.

5 What fraction of the cards are shaded?



.....