

Identify or show unit fractions up to one tenth of a quantity up to 100	Component 3	Entry 3.1
--	--------------------	------------------


Name

1 Shade in

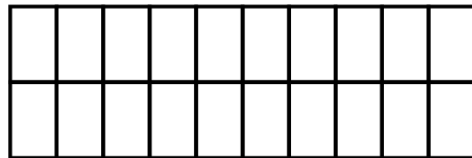
a) one tenth



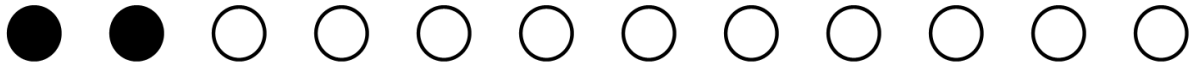
b) one eighth



c) one tenth



2 Look at the counters.



Circle the correct words.

One fifth / one sixth of the counters are shaded

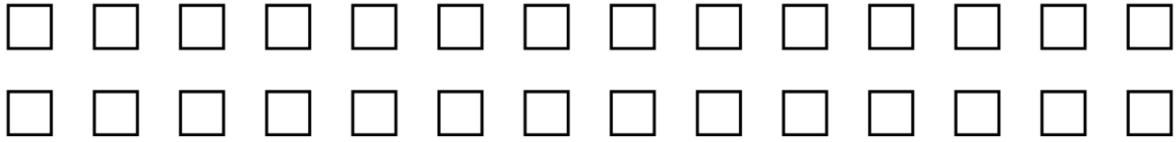
3 Look at the counters.




Circle the correct words.

One fifth / one tenth of the counters are shaded

4 Colour in one seventh of the tiles.



5 What fraction of the cards are shaded?



.....

3.1		2.1		1.2	
-----	--	-----	--	-----	--