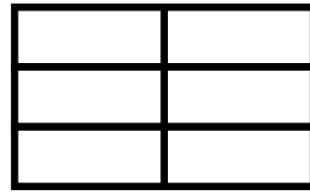
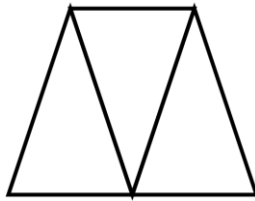
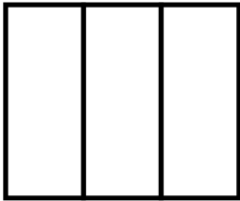


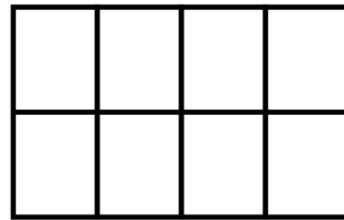
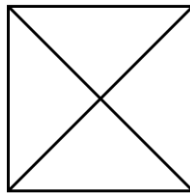

Identify or show one third or one quarter of a quantity up to 24	Component 3	Entry 2.1
--	-------------	-----------

Name

1 Shade in one third of each of shape.



2 Shade in one quarter of each shape.



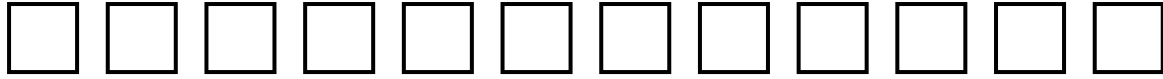
3 Look at the counters.



Circle the correct word.

One third / quarter of the counters are shaded.

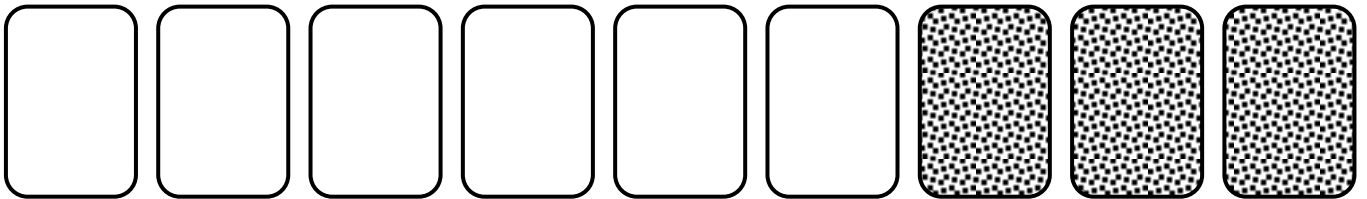
4 Colour one quarter of the tiles.



5 Colour one third of the counters.



6 What fraction of the cards are **not** blank?



.....