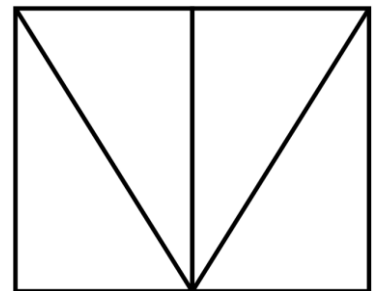
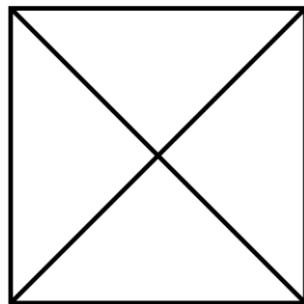
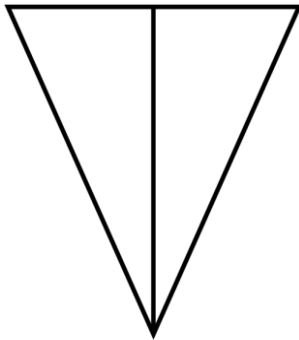


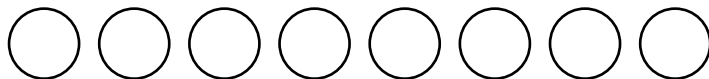
Identify or show one half of a quantity up to 20	Component 3	Entry 1.2
--	-------------	-----------

Name .....

1 Shade in one half of the following shapes.



2 Draw a ring round **one half** of the counters.



3 Look at the stars.



Tick the correct statement.

Half of the stars have stripes

Half of the stars are blank

4 Shade in one half of the following.

